

Count money – pence

1 Match the coin to its value.



20p



2p



50p



1p



10p



5p

2 How much money is there?












3 How much money is there?





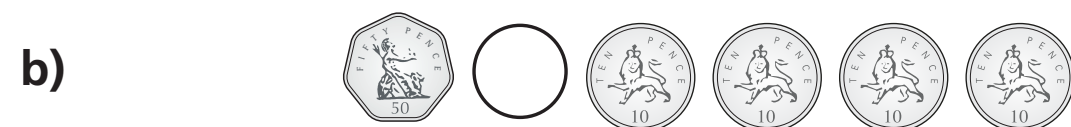



4 Dexter has this money.



How much money does Dexter have?

5 Write $<$, $>$ or $=$ to compare the money.




6 Annie has this money.



Tommy has this money.




I have more money because I have more coins.



Is Annie correct? _____

How do you know?

7 Rosie wants to buy this packet of sweets.









She has this money.








Does Rosie have enough money? _____

Count money – pence

1 Match the coin to its value.

					
20p	2p	50p	1p	10p	5p

2 How much money is there?

a) 	7p
b) 	50p
c) 	20p
d) 	12p
e) 	60p

3 How much money is there?

a) 	23p
b) 	28p
c) 	62p


4 Dexter has this money.



How much money does Dexter have?

95p

5 Write $<$, $>$ or $=$ to compare the money.




6 Annie has this money.



Tommy has this money.



I have more money because I have more coins.



Is Annie correct? No

How do you know?

7 Rosie wants to buy this packet of sweets.



She has this money.



Does Rosie have enough money? Yes